



N.R. CONVENT SR. SEC. SCHOOL

ENGLISH ASSIGNMENT

***Subject Teacher : Kalpana
Contact Number : 9711268369***

Section – A (Reader)

A. Read the following lines and answer the questions.

'Here, I'll give you something nice,' and it dropped a half-eaten mouse for Samira.

Question a: Who is the speaker in this line?

Question b: How did Samira react on seeing the half-eaten mouse?

B. Write meaning of the following words.

(a) Splendid _____

(b) Luggage _____

(c) Crawling _____

(d) Tug _____

(e) Awkward _____

C. Complete these sentences.

(a) On seeing the puppies, the little boy's eyes _____ .

(b) But I wouldn't be a postman if _____ .

D. Answer these questions

Question a) Why did Samira make a face on opening her tiffin box?

Question b) What may stop the postman from doing his duty?

Question c) Why did the boy want that particular puppy?

Section – B (Grammar)

A. Write seven lines on My Best Friend.

B. Write opposite of the following words.

(a) Slowly _____

(b) Sweet _____

(c) Busy _____

(d) Honest _____

(e) Admired _____

C. Identify the types of sentences.

(a) How was your exam?

(b) Bring it here, right now.

(c) That is not just fair!

D. Write answer in one word only.

(a) He designs the building

(b) He studies the stars and universe

E. Write predicates for the following subjects.

(a) The birds _____

(b) Wild animals _____

F. Add correct punctuation marks.

(a) The weather is amazing ()

(b) Do you wish to come with me ()



N.R. CONVENT SR. SEC. SCHOOL

SCIENCE ASSIGNMENT

Subject Teacher : Kalpana

Contact Number : 9711268369

A. Write answer in one word.

- (i) This diet includes all the nutrients
- (ii) This calcium helps in formation of bones and teeth
- (iii) The hard white substance that covers the tooth
- (iv) Another name for temporary teeth
- (v) An instrument used to see tiny living organisms (microbes)

B. Fill in the blanks.

- (i) Disease causing microbes are called _____ .
- (ii) _____ is made in liver and helps to digest fats.
- (iii) The part of plant food that cannot be digested is called _____ .

C. Write two examples of each

- (i) Carbohydrates
- (ii) Protein
- (iii) Microbes
- (iv) Types of teeth

D. Write (T) for true and (F) for the false one.

(i) Proteins are called protective food

(ii) Fats give us quick energy

(iii) We should rinse our mouth after every meal

(iv) All microbes are harmful to us

E. Match the following.

(i) Incisors

32

(ii) Permanent teeth

Strong bones

(iii) Iron

Blood

(iv) Vitamin D

8

F. Tick the correct choice.

(a) There are main _____ kind of microbes

i) Two

ii) Three

iii) Four

b) We should drink this to keep our teeth healthy

i) Milk

ii) Juice

iii) Cold drink

c) This does not need to be cooked

i) Chutney

ii) Rice

iii) Chicken

d) These are also known as grinding teeth

i) Molars

ii) Premolars

iii) Incisors

G. Answer the following questions

- (i) Which Vitamin is important for healthy teeth and gums?**
- (ii) Write any two ways used for preserving food.**
- (iii) Why should we take roughage in our food?**
- (iv) What is the function of small intestine?**
- (v) What is the function of Premolars?**

NR CONVENT SENIOR SECONDARY SCHOOL

Class- 4th

Mathematics

Assignment

1. Compare the numerals using $<$, $>$ or $=$

a. $4,242 \bigcirc 2,424$

b. $2,482 \bigcirc 2,493$

c. $9,900 \bigcirc 9,009$

d. $38,496 \bigcirc 78,942$

2. Fill in the blank

a. $7000 - 2000 = \underline{\hspace{2cm}}$

b. $3,43,819 + \underline{\hspace{2cm}} = 3,43,820$

c. $9,999 - 999 = \underline{\hspace{2cm}}$

d. 9,000 more than 1,890 is $\underline{\hspace{2cm}}$

e. Subtrahend + difference = $\underline{\hspace{2cm}}$

f. $38,501 + 0 = \underline{\hspace{2cm}}$

3. From the greatest and the smallest 4-digit numerals using the following digits

Digits	Greatest numeral	Smallest numeral
9,3,0,8		
1,3,4,6		

4 Add the following

a) TTh Th H T O
3 0 1 2 5
+ 2 9 7 2 3

b) L TTh Th H T O
2 0 3 1 5 6
+ 3 2 1 7 0 3

c) TTh Th H T O
4 9 2 8 7
1 3 4 7 6
+ 2 8 9 0 7

5. Write the Number Name for the given numeral

- a. 92,810 _____
- b. 9,17,348 _____
- c. 8,967 _____

6. Write the place and period of the underlined digit in the following numeral

Numeral	Place	Period
90,1<u>2</u>0		
<u>9</u>3,105		
3,24,1<u>7</u>3		

7. Find the difference.

a. $63,420 - 37,952$

b. $36,819 - 23,707$

c. $9,381 - 7414$

8. Skip by 5s and write the numerals from

a. $8,11,735$ to $8,11,765$

b. $7,32,812$ to $7,32,842$

9. Subtract and check your answer

$46,003$ from $58,184$

10. Word problems

a. The population of a city is $9,20,801$. If the number of males and children in $5,63,281$, find the number of

females in the city.

b. There are 1,26,302 fiction book and 2,32,717 non-fiction books in a library. How many total books are there in the library?

General knowledge assignment

1. Which is the smallest bird in the world ?
2. Which place in India is known as the tea garden ?
3. How many bones are there in a human body ?
4. What is the height of the highest peak of the world, Mount Everest ?
5. Which country is largest in terms of population ?
6. Who wrote the Mahabharata ?
7. What is the full form of WHO ?
8. Name the biggest bird in the world .
9. Who was the first prime minister of India ?
10. Milk ,eggs and cheese are source of which mineral ?
11. Who is the finance minister of India ?
12. Which is the tallest mountain in the world ?

13. Who invented the computer ?
14. What is the next number in the following sequence 7 ,14, 21 ,28 ?
15. Write the name of the following :
 - Prime minister of India.
 - President of India.
 - Vice President of India.
 - Chief minister of Delhi.
 - Who is called father of nation.
 - Who wrote National anthem.

N R CONVENT SR. SEC. SCHOOL

ASSIGNMENT for class -IV

Sub-SOCIAL STUDY

Q-1) Write the capitals of the following states.

- a) Haryana = _____
- b) Bihar. = _____
- c) Nagaland = _____
- d) Rajasthan =. _____

Q-2) Fill in the blanks.

- a. India is the _____ largest country in the world.
- b. Almost three-fourth population of India is dependent on _____ .
- c. _____ are the highest mountain range in the world.
- d. The outer Himalaya s are also known as _____ .

Q-3) Name the following.



- a. Which is the longest river in India?
- b. Who lives in the Rashtrapati bhawan?
- c. Write famous national park of Assam.
- d. Write the name of dam Which is built on the Sutluj river.

Q-4) Match the following.



- Goa Ranchi
- Jharkhand. Panji
- Sikkim. Mawnsyram
- Meghalaya. Teesta

Q-5) write (T) for true and (F) for false.

- A. Bhopal is the capital of Madhya pradesh.
- B. India gained it's independence in year of 1856.
- C. Nagaland is known as the apple state of India.
- D. The grater Himalayas known as Himadri.

- 
- 
1. भारत के बच्चों को कौन नहीं रोक पाएगा ?
 2. चट्टाने किसकी प्रतीक है?
 3. हमिद क्यों प्रसन्न था ?
 4. केशव क्या हठ कर रहा था ?
 5. नरेंद्र को विवेकानंद का नाम किसने दिया था ?

5. मूल्यपरक प्रश्न :

1. आप अपने दादा दादी या माता-पिता के लिए क्या-क्या करते हैं जिससे उनको और आपको खुशी मिलती है ?
 2. जीवन में सफल होने के लिए कौन कौन से गुण आवश्यक है ?
- 
- 

हिंदी

1. विनोम शब्द लिखो :

आशा , प्रकाश , खुशबू , अच्छा , अमीर , समझदार


2. दिए गए शब्दों का उनके पर्यायवाची शब्दों से मिलान कीजिए।


- | | |
|----------|----------|
| 1. समीर | • काया |
| 2. बिजली | • वाटिका |
| 3. लोचन | • चपना |
| 4. बदन | • पवन |
| 5. उपवन | • नयन |

3. रेखांकित शब्दों के विनोम शब्द लिखकर वाक्य पूरे कीजिए :

- रमेश बहुत बहादुर है और सुरेश _____ है।
- जीवन में सुख और _____ आते जाते रहते हैं।
- बिजली के जाने पर प्रकाश _____ में बदल गया।

4. निम्नलिखित प्रश्नों के उत्तर लिखो। (पाठ्यपुस्तक के आधार पर)





Computer assignment

Assignment

Note : Do this assignment in your notebook

1. What is computer peripherals ?
2. What is binary language ?
3. What is the full form of ROM ?
4. What is the full form of RAM ?
5. Define icons .
6. Name the first version of windows ?
7. What is the function of windows explorer?
8. Define desktop .
9. Name the parts of a windows desktop?
10. Name the two types of primary memory ?